

$10 - 6 = \square$

$10 - 10 = \square$

$10 - 3 = \square$

$10 - 7 = \square$

$8 - 5 = \square$

$10 - 9 = \square$

$10 - 2 = \square$

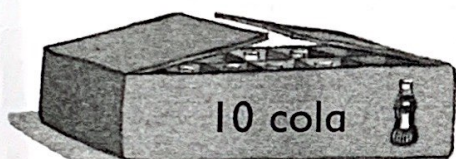
$10 - 8 = \square$

$10 - 5 = \square$

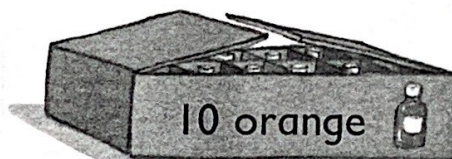
$10 - 0 = \square$

$10 - 4 = \square$






$10 - 1 = \square$




Drink 3.
How many are left? ____



Drink 9.
How many are left? ____






4 fall down.

How many are left? _____

$$10 - 4 =$$



3 fall down.


How many are left? _____

$$6 - 3 =$$




2 fly away.

$$- =$$



5 fly away.


$$- =$$



5 go away.



6 go away.



3 jump in.