





How many more  ?


$$8 - 3 =$$




How many more  ?


$$10 - 7 =$$





How many more  ?


$$8 - 6 =$$




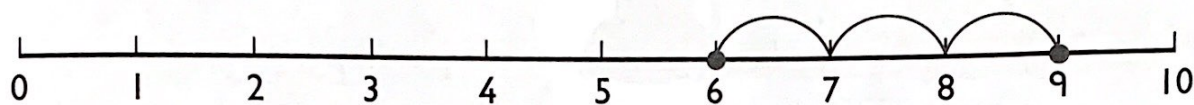
How many more  ?



How many more  ?

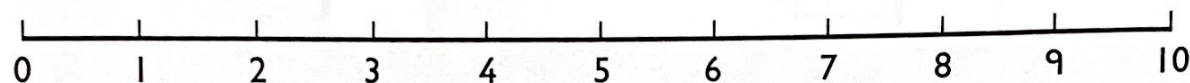


How many more  ?



The difference between 6 and 9 is ____

$$9 - 6 =$$



The difference between 10 and 8 is ____

$$10 - 8 =$$

The difference between 4 and 7 is ____

Find the difference between

1 and 6

2 and 8

10 and 3

8 and 4

7 and 6

5 and 9

<input type="text"/>	-	<input type="text"/>	= 1
<input type="text"/>	-	<input type="text"/>	= 1
<input type="text"/>	-	<input type="text"/>	= 3
<input type="text"/>	-	<input type="text"/>	= 3

