

How many fish? _____

$$6 - 1 = \square$$

$$6 - 4 = \square$$

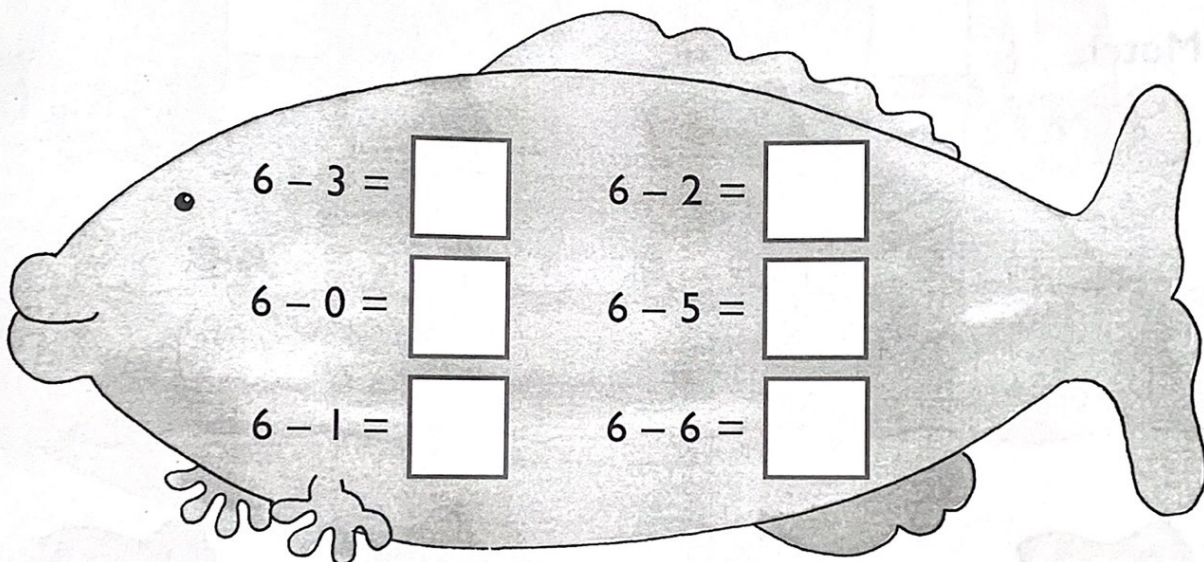
$$6 - 2 = \square$$

$$6 - 5 = \square$$

$$6 - 0 = \square$$

$$6 - 3 = \square$$

$$6 - 6 = \square$$









Match.

6 subtract 2

$6 - 4$

6 take away 6




6 take away 3

$6 - 1$

6 subtract 5

How many ★ ? _____



$$7 - 0 = \square$$

$$7 - 1 = \square$$

$$7 - 2 = \square$$

$$7 - 3 = \square$$

$$7 - 4 = \square$$

$$7 - 5 = \square$$

$$7 - 6 = \square$$

$$7 - 7 = \square$$


Match.

$$7 - 2$$

$$7 - 5$$

$$7 - 1$$

$$7 - 6$$



$$7 - 7$$

$$7 - 3$$

$$7 - 0$$

$$7 - 4$$

$$7 \text{ take away } 2 = \square$$

$$7 \text{ take away } 5 = \square$$

$$7 \text{ subtract } 6 = \square$$

$$7 \text{ subtract } 3 = \square$$

$$7 - 4 = \square$$

$$7 - 0 = \square$$

$$7 - 1 = \square$$



How many? _____


5 swim away.

How many are left?

How many? _____

3 swim away.

How many are left?



Match.

