

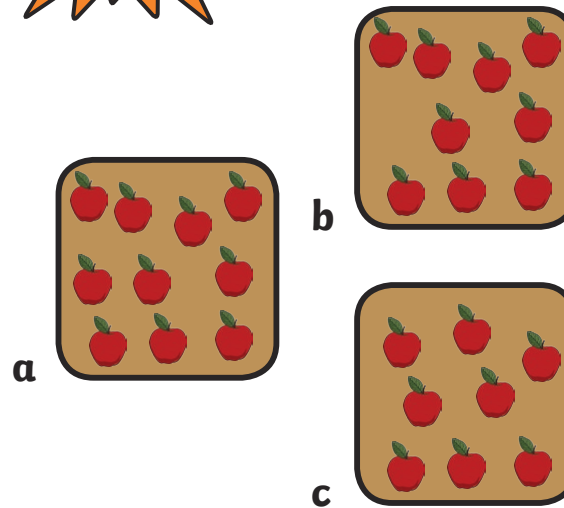
Maths Challenge

twinkl

twinkl.com

1



Which box holds 10 apples?



twinkl.com

2

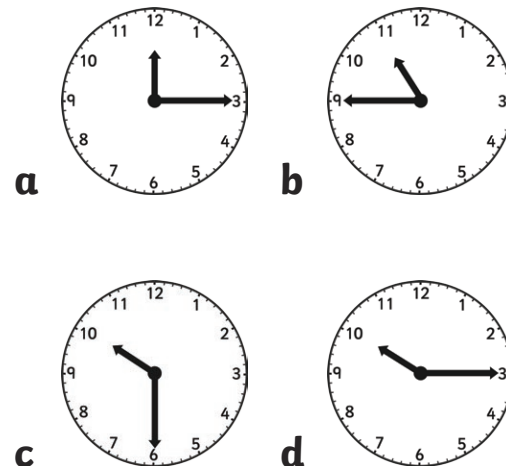
Which pizza has been cut into quarters?



twinkl.com

3

Which clock shows 10:30?



twinkl.com

4

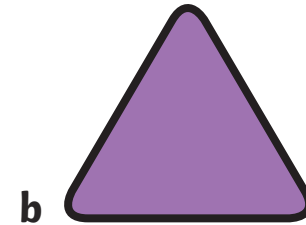

Is the spinner more likely to land on red or yellow?



twinkl.com

5

Which shape is a triangle?



twinkl.com

6

Look at this pattern:




Which is the correct ending?



twinkl.com

7

Is this picture symmetrical?



twinkl.com

8

Can you add these coins together?
How much is there?



twinkl.com

9

How do you write this number
using letters:

7

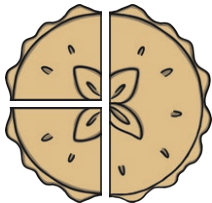
- a) four
- b) nine
- c) six
- d) seven




twinkl.com

10


Which pie has been cut into
equal parts?



b



c



twinkl.com

11

Put these numbers in order, from
least to greatest.



twinkl.com

12

How many corners does this shape have?

